

KOLOLO JUNIOR SCHOOL

PRE PLE SET 8 2022 (B1)

CLASS : **P.7**
SUBJECT : **SOCIAL STUDIES AND R.E**
DURATION : **2 HOURS 15 MINUTES**

Previous Mark	
Expected Mark	
Actual Mark	

INDEX NUMBER :

--	--	--	--	--	--	--	--	--

Name _____ **Stream** _____

SECTION A:

1. Kato was going to school early in the morning and he saw his shadow in front of him.
In which direction was the school?

2. Which neighbouring country lies to the north east of Kenya?

3. Identify any one weather instrument which is not kept in a Stevenson screen.

4. Why should the government encourage the community to plant more trees?

5. How has the NAADS programme improved the livelihood of rural farmers in Uganda?

6. Give one reason why river Congo pours the greatest volume of water into the Atlantic Ocean.

7. Why is the Ugandan flag sometimes flown on half-mast?

8. For what reason is the cement factory located in Tororo other than Mukono town?

9. What is the importance of carrying out rural electrification in Uganda?

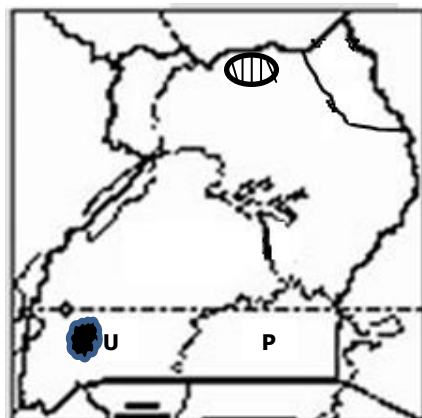
10. State one reason why Fort Jesus was built by the Portuguese.


11. How was the LEGCO of the colonial period similar to the present day parliament of Uganda?

12. Name the agent in Uganda who was appointed to assist in establishing the British colonial rule.

-
13. How are the Fulani of Nigeria similar to the Karimajong of Uganda in terms of their occupation?
-
14. Give one role of a good citizen.
-
15. How was the Mau Mau rebellion similar to the Maj Maji rebellion?
-
16. In which way was the formation of mountain Rwenzori different from that of mountain Kilimanjaro?
-
17. Identify one country in Africa which was not colonized by foreigners.
-
18. Which type of climate is described as hot and dry throughout the year?
-
19. Which name was given to the long journey made by Boars from the Cape Colony to the new found states?
-
20. Why was Ghana referred to as the Gold Coast by Europeans?
-
21. What is the importance of budgeting to your school?
-
22. Why is Dr. Leakey remembered in the history of East Africa?
-
23. State one reason why Uganda has sent her troops (soldiers) to Somalia.
-

Use the map below to answer questions 24 - 25



24. Name the rebellion which was staged in the shaded area  during the colonial period.
-
25. Give the evidence to show that lake U is on a higher altitude than lake P.
-

-
26. Why is Nkwame Nkurumah remembered in the history of Africa?
-
27. State one reason why the highlands and lake regions of East Africa are densely populated.
-
28. Name the major cash crop grown on the Gezira irrigation scheme in Sudan.
-
29. Mention one cause of refugees in Africa.
-
30. State one problem faced by people living in mountainous areas.
-
31. How has the creation of more districts in Uganda benefited the people living there?
-
32. State one reason why slave trade took long to end in Africa.
-
33. Mention the reason why the railway line was extended from Kampala to Kasese.
-
34. State one way children are being abused in Uganda.
-
35. Why should PIASCY be taught in schools of Uganda?
-
- For questions 36 – 40, answer either Christianity or Islam but not both.**
36. **Either:** Name the mountain where Noah's Ark rested.
-
- Or:** Name the mountain where Nuhu's ship rested.
-
37. **Either:** Who led the Israelites to the Promised Land?
-
- Or:** Which prophet is remembered for his patience and endurance?
-
38. **Either:** Which angel delivered God's message to Mary?
-
- Or:** Which angel used to deliver Allah's messages to prophet Muhammad?
-
39. **Either:** State one way lent is important in the Christian faith.
-
- Or:** State the importance of Rhamadhan to Muslims.
-
40. **Either:** Name the disciple who doubted the resurrection of Jesus.
-
- Or:** Why did prophet Muhammad move from Mecca to Medina?
-

SECTION B

41(a) Differentiate between weather and climate.

(b) State two elements of climate.

(i)

(ii)

(c) Why are weather forecasts important to a farmer?

42 a) Give any two ways Mabira forest is socially important to the people who stay around it?

(i)

(ii)

b) How do trees help to reduce the effect of bad weather?

c) State any one way the government of Uganda is trying to protect the natural forests in the country

43a) Give any one major contribution of a high population density to a country.

b) Mention atleast one social factor that has led to Uganda's population growth in the recent years

c) Give any two reasons why Karamoja is sparsely populated

(i)

(ii)

44(a) Mention the new name of the Organization of African Unity.

(b) Name the current Chair Person of the commission of the body you have mentioned in (a) above.

(c) Suggest two reasons why the above organization was formed.

(i)

(ii)

45(a) What is a national budget?

(b) Mention any two parts of a budget.

(i)

(ii)

(c) Which ministry is in charge of the national budget?

46(a) Name the body responsible for organizing elections in Uganda.

(b) State any two functions of the body you have mentioned in (a) above.

(i) _____

(ii) _____

(c) State one reasons why by-elections may be held.

47(a) State two reasons why the Portuguese were interested in East Africa.

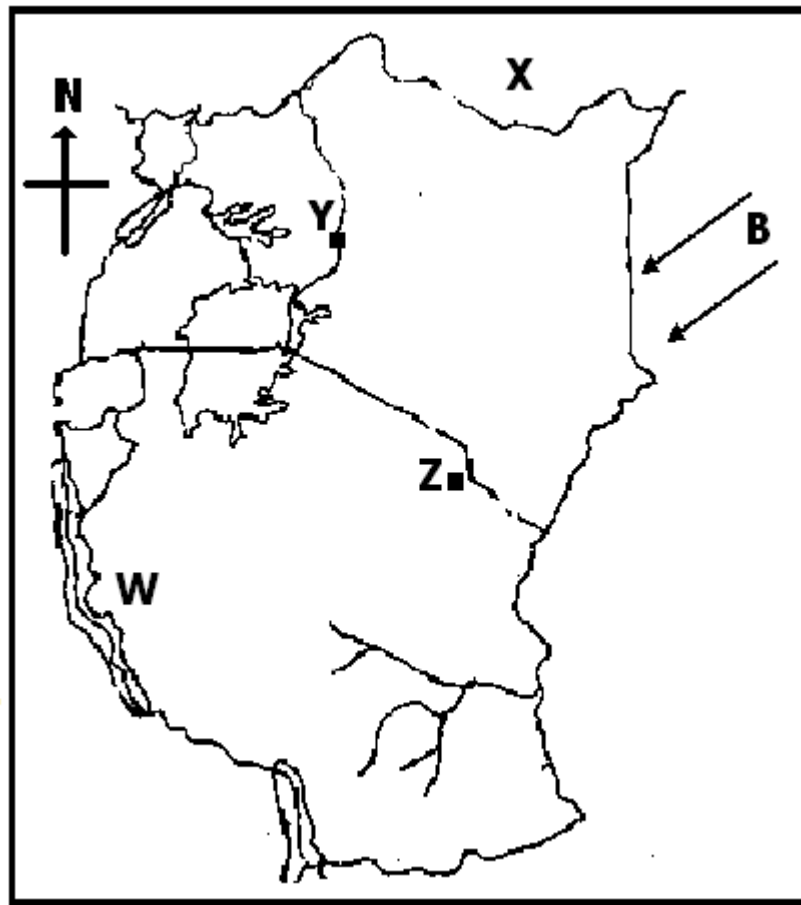
(i) _____

(ii) _____

(b) Mention one problem faced by the Portuguese at the East African coast.

(c) How has Fort Jesus remained important to the people of Kenya today?

48. **Study the map of East Africa and answer the questions about it.**



(a) What is the relationship between people who live on the slopes of mountain Y and Z in terms of economic activities?

(b) Name the country marked X.

(c) Give the effect brought by the winds marked B.

(d) In winch arm of the rift valley is lake W located?

49(a) How is cocoa growing important to the economic development of Ghana?

(ii) _____

(ii) _____

(b) Mention any one problem faced by cocoa farmer in Ghana.

(c) How is the harvesting of cocoa different from that of coffee?

50(a) Name one multi-purpose river project in Africa.

(b) Write down any two reasons why the multi purpose river project is important.

(i) _____

(ii) _____

(c) Suggest any one problem faced by government when setting up the multi purpose river project.

For 51 – 55, answer either Christianity or Islam but not both on the same number

51. **Either:** a) What was Jesus' main mission on earth?

b) Give one lesson Christians learn from Jesus' crucifixion.

c) State the two ways John the Baptist prepared people for the coming of the saviour

(i) _____

(ii) _____

OR: a) Who was the father of Prophet of Ibrahim?

b) Write down any one way Prophet Ibrahim showed his faith to Allah

b) Write two benefits of fasting to a Muslim.

(i) _____

(ii) _____

52. **Either:** a) Why is prophet Isaiah greatly remembered in Christianity?

b) Which prophet preached about justice and true worship?

c) Why did God send prophets?

d) Why is Egypt a very important place in the history of Christianity?

OR: a) Muslims are expected to respect and believe in all prophets of Allah. Whom do Muslims believe in as the first prophet?

b) How many prophets do Muslims believe in according to Islamic teaching?

c) Point out any two duties of a prophet.

- (i) _____
(ii) _____

53. **Either:**

(a) What work was Moses doing before he was called by God.

(b) Name one event that took place on Mt. Sinai.

(c) Mention any two miracles Moses performed before Pharaoh in Egypt.

(i) _____

(ii) _____

Or:

(a) Write down any two pillars of Islam.

(i) _____

(ii) _____

(b) Name the first and last prophets in Islam.

(i) First prophet _____

(ii) Last prophet _____

54. **Either:**

(a) What is a parable?

(b) Why did Jesus use parables in most of his teachings?

(c) What lessons do we learn from the following parables?

(i) the prodigal son

(ii) the Good Samaritan

Or:

(a) Why are the following people important in the Islamic faith?

(i) Imam

(ii) Muazzin

(b) Mention any two of the daily prayers offered by Muslims.

(i) _____

(ii) _____

55. **FOR BOTH:** a) Point out any two similar practices between Islam and Christianity?

- (i) _____
(ii) _____

b) State the major role of the Inter Religious Council in Uganda.

c) Give any one major reason why people of different religions should show respect for one another.

d) Mention atleast one way a good Muslim should behave.
